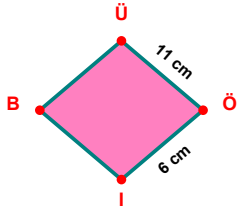
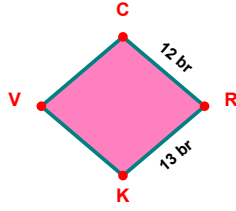


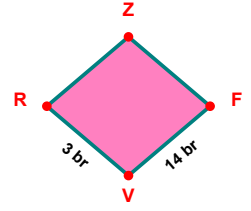
SORU: Aşağıdaki şekillerde verilen, kenar uzunlukları farklarını bulunuz.



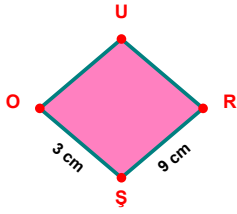
$$|ÜÖ| - |Öİ| = \dots\dots$$



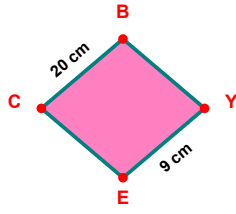
$$|RK| - |CR| = \dots\dots$$



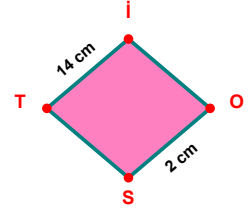
$$|FV| - |VR| = \dots\dots$$



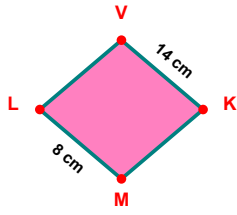
$$|RŞ| - |ŞO| = \dots\dots$$



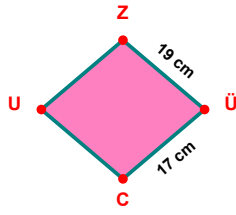
$$|CB| - |YE| = \dots\dots$$



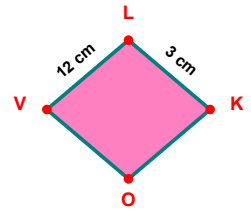
$$|Tİ| - |OS| = \dots\dots$$



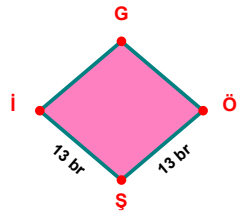
$$|VK| - |ML| = \dots\dots$$



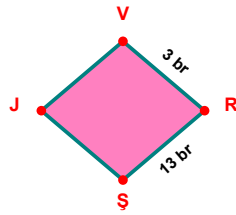
$$|ZÜ| - |ÜC| = \dots\dots$$



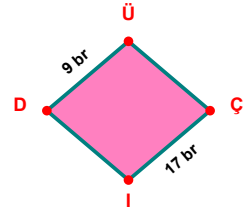
$$|VL| - |LK| = \dots\dots$$



$$|ÖŞ| - |Şİ| = \dots\dots$$

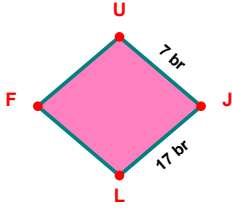


$$|RŞ| - |VR| = \dots\dots$$

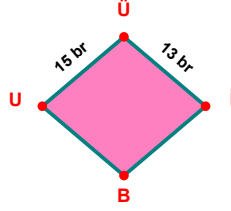


$$|Çİ| - |DÜ| = \dots\dots$$

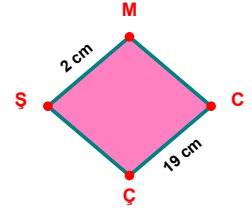
SORU: Aşağıdaki şekillerde verilen, kenar uzunlukları farklarını bulunuz.



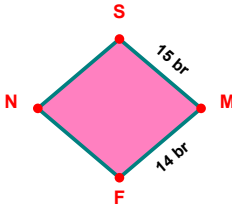
$$|JL| - |UJ| = \dots\dots$$



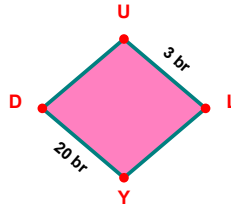
$$|UÜ| - |Üİ| = \dots\dots$$



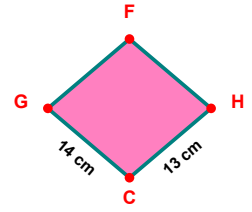
$$|CÇ| - |ŞM| = \dots\dots$$



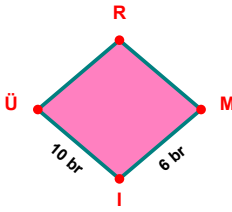
$$|SM| - |MF| = \dots\dots$$



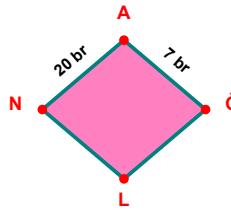
$$|YD| - |UL| = \dots\dots$$



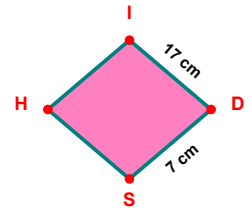
$$|CG| - |HC| = \dots\dots$$



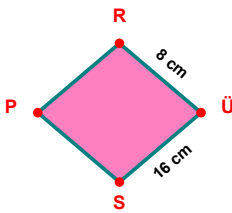
$$|RÜ| - |MI| = \dots\dots$$



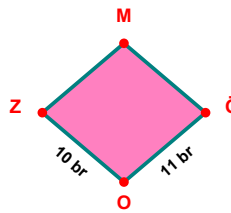
$$|NA| - |AG| = \dots\dots$$



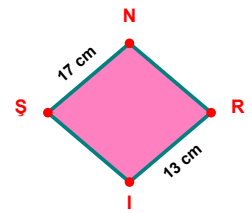
$$|ID| - |DS| = \dots\dots$$



$$|ŞS| - |RÜ| = \dots\dots$$



$$|ÖO| - |OZ| = \dots\dots$$



$$|ŞN| - |RI| = \dots\dots$$

SÜREÇ ODAKLI DEĞERLENDİRME ÖLÇEĞİ

Doğru Sayısı: / 24

Öğretmen ilgili kutucuğu işaretler.

Geliştirilmeli (0-8)

İyi (9-14)

Çok İyi (15-20)

Mükemmel (21-24)

☐
☐
☐
☐

Hazırlayan:

Bu bölüme sınıfınızın ilgili kazanıma yönelik genel durumuna ilişkin gözlem ve izlenimlerinizi, öğrencilerinizin bu kazanımla ilgili öğrenme eksikliklerini ve bu eksikliklerin giderilmesi amacıyla yaptığınız/yapmayı planladığınız faaliyetleri not edebilirsiniz.

No	Adı - Soyadı	Toplam Puan	Değerlendirme
1			
2			
3			
4			
5			
6			
7			
8			
9			
10			
11			
12			
13			
14			
15			
16			
17			
18			
19			
20			
21			
22			
23			
24			
25			
26			
27			
28			
29			
30			
31			
32			
33			
34			
35			

Hazırlayan: